

Test 11 Revision

1. Write in figures:
eighty-seven thousand five hundred and sixteen.
2. What is the sum of 1995 and 10?
3. Make 34 895 bigger by 20.
4. Make 63 587 smaller by 301.
5. From 78 623 take 4000.
6. Add 103 to 87 965.
7. Round 42 502 to the nearest thousand.
8. What is the value of the 3 in 38 496?
9. Which is closer to 54 000: 55 200 or 52 300?
10. Make the smallest number possible using these digits:




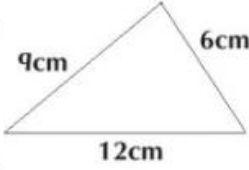

7 9 3 8 5

Answers ✓/✗

1.	<input type="text"/>	<input type="checkbox"/>
2.	<input type="text"/>	<input type="checkbox"/>
3.	<input type="text"/>	<input type="checkbox"/>
4.	<input type="text"/>	<input type="checkbox"/>
5.	<input type="text"/>	<input type="checkbox"/>
6.	<input type="text"/>	<input type="checkbox"/>
7.	<input type="text"/>	<input type="checkbox"/>
8.	<input type="text"/>	<input type="checkbox"/>
9.	<input type="text"/>	<input type="checkbox"/>
10.	<input type="text"/>	<input type="checkbox"/>

Total ✓

Test 12 General Revision

1.  How many lollipops costing 8c each can be bought with 96c?
2. The product of two numbers is 45. One of the numbers is 5. What is the other number?
3. $7 \times 6 = \boxed{?}$
4. Name this 3D shape. 
5. How many days are there in April?
6.  How many ice-creams each costing 20c can be bought with €5?
7. How many minutes are there in $2\frac{1}{2}$ hours?
8. Write $\frac{7}{100}$ in decimal form.
9. What is the perimeter of this triangle? 
10.  School started at 8.50am. If Art was 16 minutes late, at what time did he arrive in school?

Answers ✓/✗

1.	<input type="text"/>	<input type="checkbox"/>
2.	<input type="text"/>	<input type="checkbox"/>
3.	<input type="text"/>	<input type="checkbox"/>
4.	<input type="text"/>	<input type="checkbox"/>
5.	<input type="text"/>	<input type="checkbox"/>
6.	<input type="text"/>	<input type="checkbox"/>
7.	<input type="text"/>	<input type="checkbox"/>
8.	<input type="text"/>	<input type="checkbox"/>
9.	<input type="text"/>	<input type="checkbox"/>
10.	<input type="text"/>	<input type="checkbox"/>

Total ✓



Test 13 Addition and Subtraction

- $8 + 8 + 7 = \boxed{?}$
- $18 + 28 + 17 = \boxed{?}$
- How much bigger is 100 than 58?
- What is the sum of 6354 and 2000?
- $8993 + 9 = \boxed{?}$

Monday's sales of milk
3983 litres

Tuesday's sales of milk
4000 litres



- How many more litres of milk were sold on Tuesday than on Monday?
- Add 100 to 9975.
- Make 76 394 smaller by 2002.
- From the sum of 80 and 30 take 10.
-  **6010 passengers**  **5007 passengers** How many passengers in total are there on the two ships?

Answers ✓/✗

-
-
-
-
-

-
-
-
-
-



Total ✓

Test 14 Addition and Subtraction

- $9 + 8 + 9 = \boxed{?}$
- $29 + 18 + 39 = \boxed{?}$
- How much smaller is 1200 than 1304?
- $9996 + 9 = \boxed{?}$
- What is the sum of 7296 and 4000?

Saturday's paper sales
18 401

Sunday's paper sales
18 702

- How many fewer papers were sold on Saturday than on Sunday?
- From 24 869 take 4004.
- Add 25 to the difference between 120 and 80.
- By how much is 37 895 greater than 37 295?
-  **23 891 passengers**  **19 891 passengers** How many more passengers are on the bigger ship than on the smaller one?

Answers ✓/✗

-
-
-
-
-

-
-
-
-
-

Total ✓

Test 15 Revision

1. Which number is nearer 50 000: 49 600 or 51 900?
2. Write in figures:
thirty-four thousand seven hundred and twelve.
3. Round 26 857 to the nearest hundred.
4. Make the largest number possible using these digits:

4	9	6	5	8
---	---	---	---	---
5. From 68 397 take 1003.
6. $9999 + 9 = \square$
7. What is the value of the 5 in 37 564?
8. From the sum of 70 and 80 take 30.
9. Make the smallest number possible using these digits:

7	1	8	5	9
---	---	---	---	---
10. Make 78 976 bigger by 203.



Answers ✓/✗

1.

2.

3.

4.

5.

6.

7.

8.

9.

10.

Total ✓